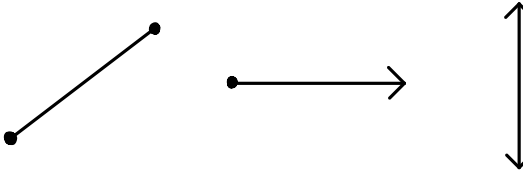
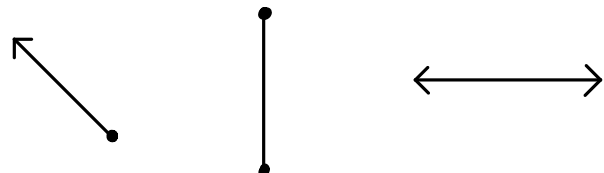
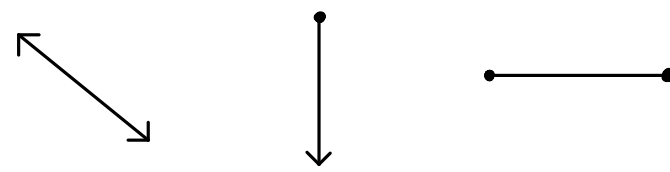



Exit Slip!

<p><u>Circle the Line:</u></p> 	<p><u>Circle the Line Segment:</u></p> 
<p><u>Circle the Ray:</u></p> 	<p><u>Circle the Biggest Angle:</u></p>  <p><i>★ bonus! draw an arrow to the right angle</i></p>

What do we use to check if an angle is a right angle?

- A. Your ruler
- B. A piece of paper
- C. Scissors

What do we use to check if an angle is a straight angle?

- A. Scissors
- B. A piece of paper
- C. Your ruler

Bonus Question:

What shape does it make when you rotate from one arm of a straight angle all the way back to the same arm?

Draw it in the box here —>

Last two questions!

1. Can we measure a line?      Yes      No      (Circle the answer you think is correct!)

2. Can we measure a line segment?      Yes      No      (Circle the answer you think is correct!)

## **Find 3 to 5 Right Angles in the Classroom!**

1. \_\_\_\_\_

2. \_\_\_\_\_

3. \_\_\_\_\_

4. \_\_\_\_\_

5. \_\_\_\_\_

## **Find 3 to 5 Straight Angles in the Classroom!**

1. \_\_\_\_\_

2. \_\_\_\_\_

3. \_\_\_\_\_

4. \_\_\_\_\_

5. \_\_\_\_\_

